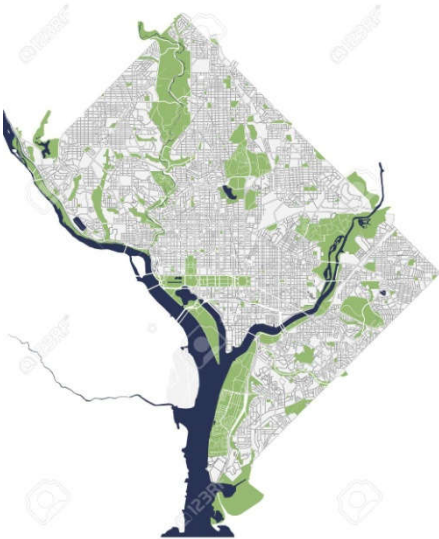


Unit 1: the city

Homework 4

1. Connect the city maps with their names:



San Salvador

<https://previews.123rf.com/images/tish11/tish111703/tish11170300044/75144589-mappa-della-citt%C3%A0-di-washington-dc-usa.jpg>



Canberra

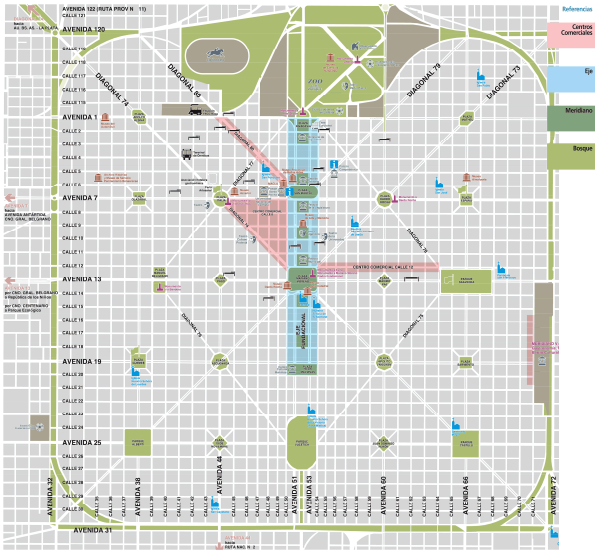
<https://i.pinimg.com/originals/dd/4e/3d/dd4e3da68c0564a832c2d1e7730cdbba.jpg>



Brasilia

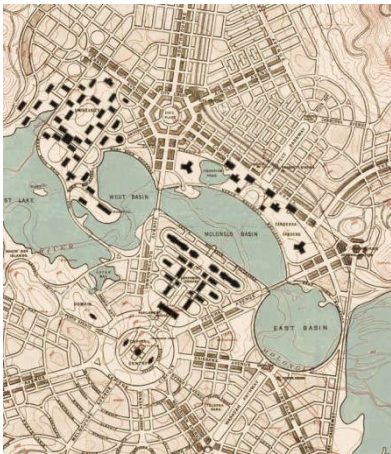
https://lh3.googleusercontent.com/proxy/-fYCMr-cfMPd5w3MvFRNvbChqdmirOR_Y8vVxWs-zqUYZxPTu_6w3WqFL8G-6eGCMn1m-

[zHc4yoIzCG6QePUr-9OS03pYEUgeNw-h3sOm0XTYT YCk](https://www.google.com/maps/@-12.9352772,-47.9282708,15z)



Palmanova

<https://i.pinimg.com/originals/83/ee/30/83ee3014bc438a0acaf0fe999d05cf96.png>



La Plata

<https://i.pinimg.com/originals/da/af/9f/daaf9f04088cfdafdb481198abc234c7.jpg>



Washington

<https://previews.123rf.com/images/tish11/tish111812/tish11181200131/12677240>

[3-vector-map-of-the-city-of-brasilia-capital-of-brazil.jpg](https://www.123rf.com/3-vector-map-of-the-city-of-brasilia-capital-of-brazil.jpg)