

# Unit 2: cities in the world

---

## 11th lesson

- 5' – giving the test and explaining the requests.

The teacher explains about the test instructions.

- 50' – test (see next page)




NAME AND SURNAME .....

DATE .....

CLASS .....

### GEOGRAPHY TEST – CITIES IN THE WORLD

1. Look at the table and cross the kind of landscape that you see:

PICTURE	URBAN/RURAL
 <p><a href="https://citygreen-com.s3.us-west-2.amazonaws.com/wp-content/uploads/2019/07/12203645/How-trees-add-value-to-landscape-design.jpg">https://citygreen-com.s3.us-west-2.amazonaws.com/wp-content/uploads/2019/07/12203645/How-trees-add-value-to-landscape-design.jpg</a></p>	<ul style="list-style-type: none"><li><input type="radio"/> Urban landscape</li><li><input type="radio"/> Rural landscape</li></ul>
 <p><a href="https://images.unsplash.com/photo-1611703623235-832548772533?ixid=MnwxMjA3fDB8MHxzZWZyY2h8MTTh8fGNpdHkiMjBsYW5kc2NhcGV8ZW58MHx8MHx8&amp;ixlib=rb-1.2.1&amp;w=1000&amp;q=80">https://images.unsplash.com/photo-1611703623235-832548772533?ixid=MnwxMjA3fDB8MHxzZWZyY2h8MTTh8fGNpdHkiMjBsYW5kc2NhcGV8ZW58MHx8MHx8&amp;ixlib=rb-1.2.1&amp;w=1000&amp;q=80</a></p>	<ul style="list-style-type: none"><li><input type="radio"/> Urban landscape</li><li><input type="radio"/> Rural landscape</li></ul>
 <p><a href="https://www.abc.net.au/news/image/4656840-3x2-940x627.jpg">https://www.abc.net.au/news/image/4656840-3x2-940x627.jpg</a></p>	<ul style="list-style-type: none"><li><input type="radio"/> Urban landscape</li><li><input type="radio"/> Rural landscape</li></ul>

 <p><a href="https://thumbs.dreamstime.com/b/shanghai-morning-city-landscape-empty-asphalt-road-shanghai-morning-city-landscape-asphalt-road-155903606.jpg">https://thumbs.dreamstime.com/b/shanghai-morning-city-landscape-empty-asphalt-road-shanghai-morning-city-landscape-asphalt-road-155903606.jpg</a></p>	<ul style="list-style-type: none"> <li>o Urban landscape</li> <li>o Rural landscape</li> </ul>
 <p><a href="https://cdn.hswstatic.com/gif/rural-landscape-design-1.jpg">https://cdn.hswstatic.com/gif/rural-landscape-design-1.jpg</a></p>	<ul style="list-style-type: none"> <li>o Urban landscape</li> <li>o Rural landscape</li> </ul>
 <p><a href="https://lh3.googleusercontent.com/proxy/9w5SH7dWuHRgA3lQgcy_ha7zos1Fr1Ok8Xk2XWIkE7Owsmw5BX1B43o4qgLMLZxMuP0expWQYpw56Kn1QFJMyRBZxikO-eURKQalu6TxGcYWC_meCmW285sZ_7Xcxb-cP3JBd8xx6vLw">https://lh3.googleusercontent.com/proxy/9w5SH7dWuHRgA3lQgcy_ha7zos1Fr1Ok8Xk2XWIkE7Owsmw5BX1B43o4qgLMLZxMuP0expWQYpw56Kn1QFJMyRBZxikO-eURKQalu6TxGcYWC_meCmW285sZ_7Xcxb-cP3JBd8xx6vLw</a></p>	<ul style="list-style-type: none"> <li>o Urban landscape</li> <li>o Rural landscape</li> </ul>
 <p><a href="https://previews.123rf.com/images/ostser777/ostser7771706/ostser777170600001/79486535-typical-street-view-in-venice-city-in-italy-urban-landscape.jpg">https://previews.123rf.com/images/ostser777/ostser7771706/ostser777170600001/79486535-typical-street-view-in-venice-city-in-italy-urban-landscape.jpg</a></p>	<ul style="list-style-type: none"> <li>o Urban landscape</li> <li>o Rural landscape</li> </ul>

2. Try to write (in a complete sentence) an advantage of living in a city and (in another sentence) an advantage of living in the countryside.



a. CITY: .....

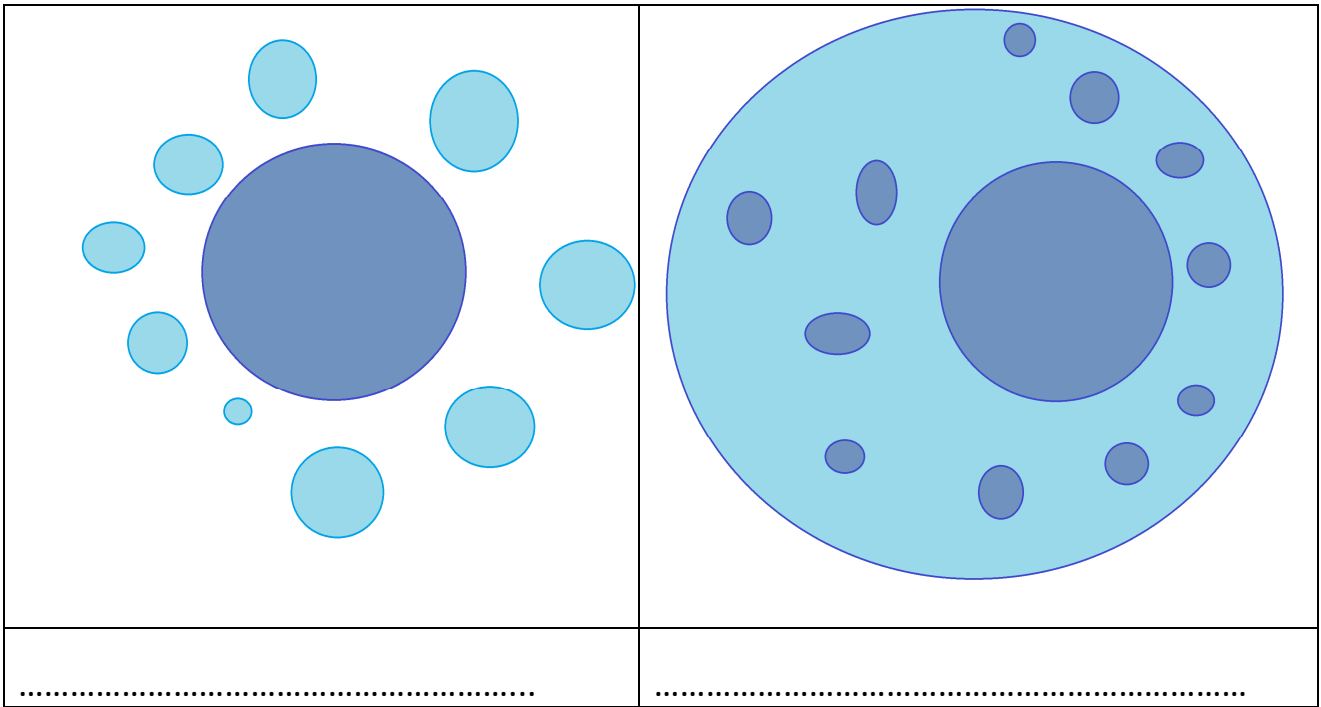
b. COUNTRYSIDE: .....

3. Complete the table with the right terms about the city:

	having a low number of people in an area
	a situation in which someone doesn't have a job
	the part of a town or city that contains most of the shops, restaurants, and places of entertainment
	the system of travelling by train
	a person or animal that lives in a particular place
	a very tall building containing offices or flats
	an area of land where industrial companies have their buildings
	people without a place to live
	having a high number of people in an area
	too many people living in a place

4. Look at the pictures and write which type of city they represent, between the four types of city that we learnt.

	
.....	.....



5. On the world map, can you colour in red the area with the most megacities?



[https://upload.wikimedia.org/wikipedia/commons/d/de/Blank\\_map\\_political\\_world\\_territories.png](https://upload.wikimedia.org/wikipedia/commons/d/de/Blank_map_political_world_territories.png)

6. On the Europe map, can you colour in blue the area where most people live?



<https://i.pinimg.com/originals/03/23/68/03236896d90ae2d8acfd854ff3230fa.gif>

How can you call this area? .....